









To solve these grid reference clues, please use **map 1**



# Cracking a Code

What place name is found at the following coordinates?

|          |   |
|----------|---|
| (14, 24) | - -  - - - - -   |
| (17, 22) | -  - - - - -     |
| (11, 24) | - -  - - - - -   |
| (17, 26) |  - - - - -       |
| (14, 27) | - - - -  -      |
| (13, 24) | - - - - -  - - |
| (12, 23) | - -  - - - - - |
| (14, 20) | - - - - -  -   |

Write the circled letters from your answers below:

Unscramble the letters to spell another location on the map:

What are its coordinates?

